

Time: 40 Minutes

Paper Math 3

Total Marks: 25


6th Month, 2nd Week, 6th Day

Syllabus: Revision Test.

Q.1. Draw the symmetry in the following figures. (10)

درج ذیل اشکال کے خط متشاکل کھینچیں۔

(i)



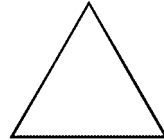
(ii)



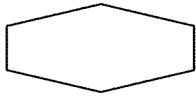
(iii)



(iv)



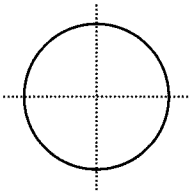
(v)



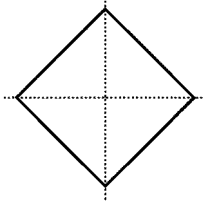
Q.2. Count the number of lines of symmetry in the following figures. (10)

درج ذیل اشکال میں خط متشاکل کی تعداد لکھیں۔


(i)



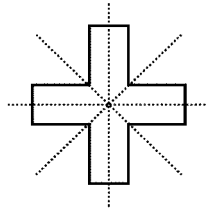
(ii)



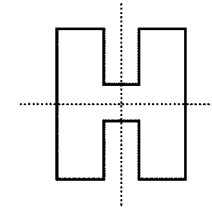
(iii)



(iv)



(v)



Q.3. Ahmad walks a square shaped ground with length 249m. How much distance does he cover in one round? (4)

احمد مربع نما گراؤنڈ میں جس کی لمبائی 249 میٹر ہے، چلتا ہے۔ اس نے ایک چکر میں کتنا فاصلہ طے کیا؟

---



---



---



---



---



---



---



---



---



---